



Mathematics

Grade -1

2nd Term- Student Note - 2

Counting numbers from 1-10














































Dear parents,

1. Please guide your child to write the students' notes by following these guidelines mentioned below.

2. Before write the students' note, watch the lesson on YouTube.

<https://www.youtube.com/watch?v=ES-pVlb25qQ&list=PLXtHrnpNsVJjuQW6eVKU440KypyX2u9wq&index=93>

3. Guide your child to complete the following student note.

	<u>Counting</u>	<u>up to</u>	<u>ten</u>			
1-one						
2 – two						
3 – three						
4 – four						
5 – five						
6 – six						
7-seven						
						
8 – eight						
						
9– nine						
						
10 – ten	